




NAME _____ DATE _____

SIMPLE FRACTIONS

What fraction does the shape show?

1. What fraction of the shape is orange?



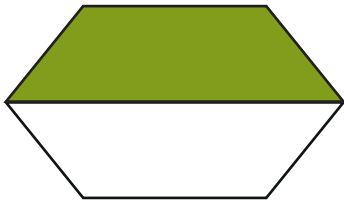
☐ $\frac{1}{5}$

☐ $\frac{1}{4}$

☐ $\frac{1}{3}$

☐ $\frac{1}{2}$

2. What fraction of the shape is green?



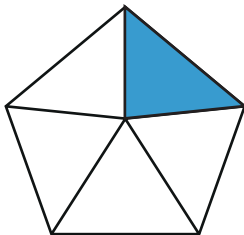
☐ $\frac{1}{4}$

☐ $\frac{1}{2}$

☐ $\frac{1}{3}$

☐ $\frac{1}{5}$

3. What fraction of the shape is blue?



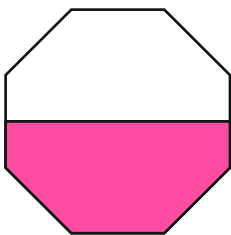
☐ $\frac{1}{5}$

☐ $\frac{1}{4}$

☐ $\frac{1}{3}$

☐ $\frac{1}{2}$

4. What fraction of the shape is pink?



☐ $\frac{1}{2}$

☐ $\frac{1}{3}$

☐ $\frac{1}{4}$

☐ $\frac{1}{5}$